



MA.4.GR.1.1

4th Grade FAST Test Prep Freebies

Identify the attribute(s) of the quadrilaterals below.



	Contains an Acute Angle	Contains an Obtuse Angle	Contains a Right Angle	Contains Two Sets of Parallel Lines
	<input type="checkbox"/>	<input type="checkbox"/>	<input type="checkbox"/>	<input type="checkbox"/>
	<input type="checkbox"/>	<input type="checkbox"/>	<input type="checkbox"/>	<input type="checkbox"/>



MA.4.GR.1.1

4th Grade FAST Test Prep Freebies

Identify the attribute(s) of the quadrilaterals below.

	Contains an Acute Angle	Contains an Obtuse Angle	Contains a Right Angle	Contains Two Sets of Parallel Lines
	<input type="checkbox"/>	<input type="checkbox"/>	<input type="checkbox"/>	<input type="checkbox"/>
	<input type="checkbox"/>	<input type="checkbox"/>	<input type="checkbox"/>	<input type="checkbox"/>